



- 1) Find area of square having each side (s) equals 71 m



Answer: _____

- 2) Find area of square having each side (s) equals 12 cm



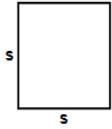
Answer: _____

- 3) Find area of square having each side (s) equals 92 cm



Answer: _____

- 4) Find area of square having each side (s) equals 20 in




Answer: _____

- 5) Find area of square having each side (s) equals 79 in



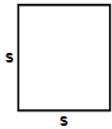
Answer: _____

- 6) Find area of square having each side (s) equals 79 ft




Answer: _____

- 7) Find area of square having each side (s) equals 98 cm



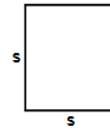
Answer: _____

- 8) Find area of square having each side (s) equals 38 ft



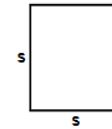
Answer: _____

- 9) Find area of square having each side (s) equals 21 ft



Answer: _____

- 10) Find area of square having each side (s) equals 63 m



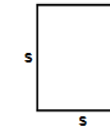
Answer: _____

- 11) Find area of square having each side (s) equals 43 cm



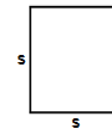
Answer: _____

- 12) Find area of square having each side (s) equals 41 m



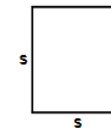
Answer: _____

- 13) Find area of square having each side (s) equals 85 ft



Answer: _____

- 14) Find area of square having each side (s) equals 86 m



Answer: _____

- 15) Find area of square having each side (s) equals 69 m




Answer: _____

Name: _____

March 13, 2018




16)



Find area of square
having each side (s)
equals 74 cm

Answer: _____

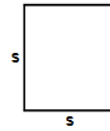
17)



Find area of square
having each side (s)
equals 45 in

Answer: _____


18)



Find area of square
having each side (s)
equals 76 in

Answer: _____

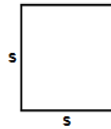
19)



Find area of square
having each side (s)
equals 32 m

Answer: _____

20)



Find area of square
having each side (s)
equals 7 cm

Answer: _____

Total: ____ / 20

Name: _____

Sr: 13032018-171

March 13, 2018

MATHS WORKSHEET

GENERATOR

11-PLUS
SATS
GCSES



Answers:

- | | | | | | | |
|-----------|------------|------------|------------|-----------|------------|-----------|
| 1) 5041m | 2) 144cm | 3) 8464cm | 4) 400in | 5) 6241in | 6) 6241ft | 7) 9604cm |
| 8) 1444ft | 9) 441ft | 10) 3969m | 11) 1849cm | 12) 1681m | 13) 7225ft | 14) 7396m |
| 15) 4761m | 16) 5476cm | 17) 2025in | 18) 5776in | 19) 1024m | 20) 49cm | |